


Starter

- Are larger objects always heavier than smaller objects?



Using the words 'more' and 'less' and the $>$ or $<$ symbols, describe the mass.



The lettuce weighs _____ than the pineapple.

Use symbols to compare the weights

Use scales to record the mass of objects in grams.




Order the items from heaviest to lightest.



What would the mass of two cups be?

What would the total mass of the banana and the coke be?

Maths quiz!



Question 1

The  weighs g.

Question 2

The  weighs g.

Question 3

How heavy could this elephant be?



5g

500g

5kg

5000kg

Question 4

How much might this butterfly weigh?



1g

1kg

10kg

100g

- Question 5

How much might this little mouse weigh?



20kg

20g

2kg

2g

Question 6

Which unit would we use to measure how much water the boy will put in the pool?



Litres

Grams

Metres

Millilitres

Question 7

What units could we use to measure his height?



Kilometres and metres

Litres and millilitres

Kilograms and grams

Metres and centimetres

Question 8

Which unit would we use to measure the temperature on the island?



Litres

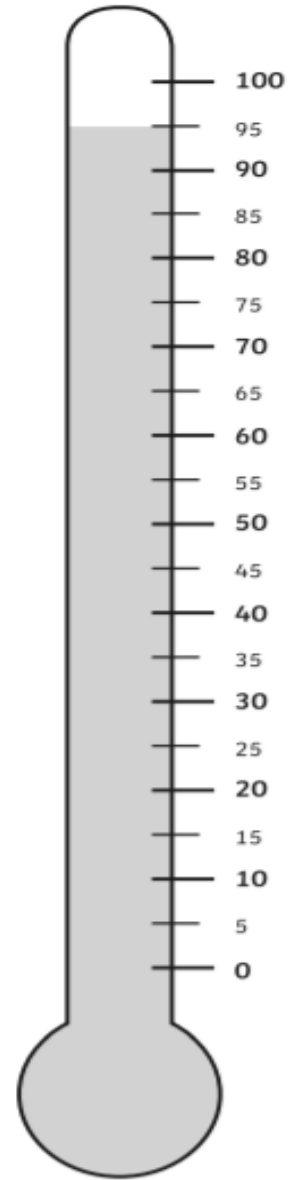
Centimetres

°C

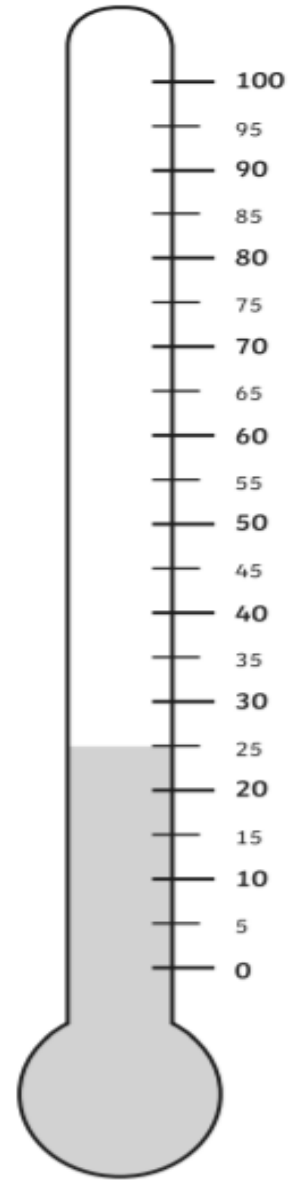
Grams

Question 9

- Write down 2 measurements



_____ °C



_____ °C

Question 10

Which is heavier?

1kg of feathers

or 1kg of bananas?

