



THIRD SPACE
LEARNING

Ready-to-go Lesson Slides








Year 1

Place Value (within 50)

To compare numbers within 50

Spring

To compare numbers within 50





To compare numbers within 50

Hinge Question:

Which number completes this sentence?

21 is less than

A 20

C 21

B 12

D 25

To compare numbers within 50

Starter:

Complete the comparison sentence.

31	32	33	34	35	36	37	38	39	40
----	----	----	----	----	----	----	----	----	----

38 is **more than** than 33.

33 is **less than** than 38

Answers



To compare numbers within 50

We can use the number tracks to complete the comparison sentences.

31	32	33	34	35	36	37	38	39	40
----	----	----	----	----	----	----	----	----	----

35 is **less than** 39.

39 is **more than** 35.

31 **equal to** 31

39 **greater than** 35

Answers



To compare numbers within 50

Guided Practice:

compare these numbers:

fifteen $<$ 50

27 $<$ 32

21 $>$ 12

47 $>$ 37

44 $>$ 24

2 tens $<$ Any number over 20

Answers

To compare numbers within 50

Independent Practice:

1. Use a number line to compare these numbers:

a. sixteen _____ 46

b. 33 _____ 32

c. 20 _____ 21

d. 31 _____ 13

e. 42 _____ 24

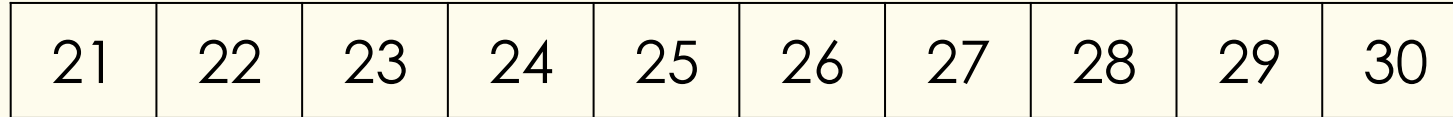
Which numbers could complete this number sentence?

f. 3 tens < _____

To compare numbers within 50

Guided Practice:

Use the number line to compare the two numbers using words and inequality symbols.



more than, less than

28 and 21

20 is less than 26

26 is more than 20

20 < 26

28 is more than 21

21 is less than 28

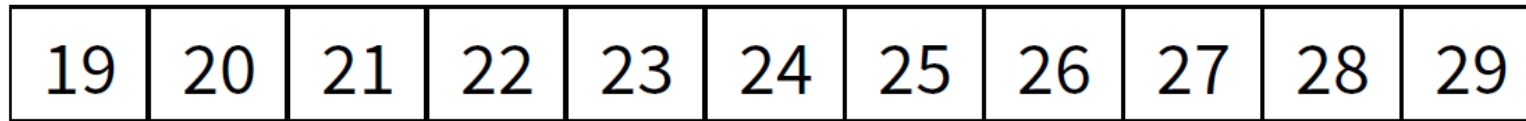
21 < 28

Answers

To compare numbers within 50

Independent Practice:

2. Use the number line to compare the two numbers using words and inequality symbols.



a. _____ is more than _____.

_____ is less than _____.

25 _____ 23

23 _____ 25

b. 21 is _____ 29.

29 is _____ 21.

21 _____ 29

To compare numbers within 50

Guided Practice:

Use the 1 – 50 grid to compare the numbers.

13 31

37 _____ fourteen

30 _____ $29 + 1$

$22 + 1$ _____ $11 + 1$

1	2	3	4	5	6	7	8	9	10
11	12	13	14	15	16	17	18	19	20
21	22	23	24	25	26	27	28	29	30
31	32	33	34	35	36	37	38	39	40
41	42	43	44	45	46	47	48	49	50

Answers

To compare numbers within 50

Independent Practice:

3. Compare the numbers using $<$, $>$ or $=$.

a. 25 _____ 23

b. 32 _____ thirty-two

c. $20 + 2$ _____ 29

d. $32 + 4$ _____ $10 + 7$

e. $20 + 1 = 23 - 3$