



THIRD SPACE
LEARNING

Ready-to-go Lesson Slides

Year 1

Place Value (within 50)

Lesson 5

To know how to compare objects within 50

Spring




To know how to compare objects within 50

Answers




To know how to compare objects within 50

What do these three symbols mean?



Less than,



more than,




equal to




To know how to compare objects within 50

What do these three symbols mean?



less than



greater than



equal to (the same as)



To know how to compare objects within 50

Marty and Matt have some cakes.

We can move the cakes to make it easier to compare the numbers.



We can line the cakes up to make it easier to compare.






To know how to compare objects within 50

Marty and Matt have some cakes.

We can move the cakes to make it easier to compare the numbers.



We can line the cakes up to make it easier to compare.







To know how to compare objects within 50

Marty and Matt have some cakes.

We can move the cakes to make it easier to compare the numbers.



We can line the cakes up to make it easier to compare.



To know how to compare objects within 50

Guided Practice:

Who has more cakes: Simon or George?

Complete the sentences.



13 is more than 12.

$$\underline{13} > \underline{12}$$

George has more cakes.

Answers

To know how to compare objects within 50

Guided Practice:

Who has more cakes: Simon or George?

Complete the sentences.



13 is more than **12** .

$$13 > 12$$

George has more cakes.

Answers

To know how to compare objects within 50

Independent Practice:

1. Who has more cakes: Simon or George?

Complete the sentences.



_____ is less than _____.

_____ < _____

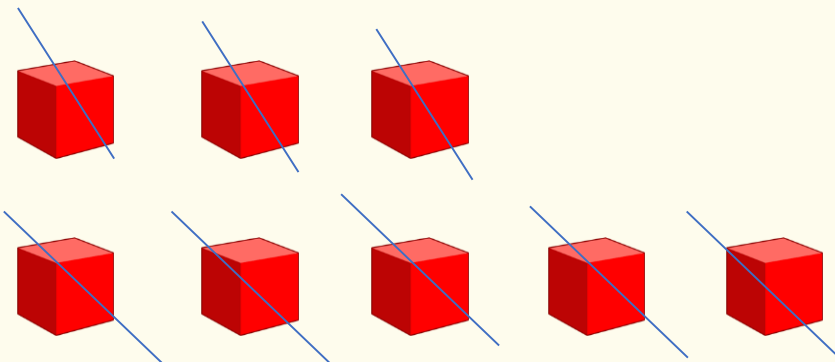
_____ has the fewest cakes.



To know how to compare objects within 50

Guided Practice:

Complete the comparison sentences:



_____ < _____

_____ > _____

Answers



To know how to compare objects within 50

Guided Practice:

Complete the comparison sentences:



$$23 < 25$$

$$25 > 23$$

Answers

To know how to compare objects within 50



Independent Practice:

2. Complete the comparison sentences:



_____ < _____

_____ > _____



_____ < _____


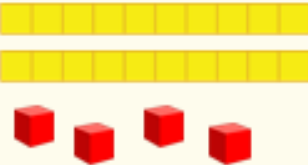

_____ > _____



To know how to compare objects within 50

Guided Practice:

Complete the table by adding in the correct inequality symbol.

					
		<table border="1" data-bbox="1378 733 1786 843"><tr><td>44</td><td>45</td><td>46</td></tr></table>	44	45	46
44	45	46			
Three tens and seven ones		Four tens and eight ones			


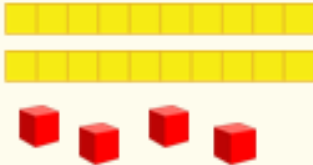

Answers



To know how to compare objects within 50

Guided Practice:

Complete the table by adding in the correct inequality symbol.


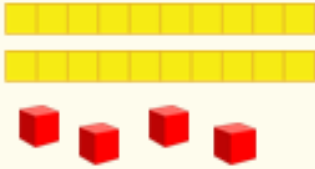

	$=$				
		<table border="1" data-bbox="1373 733 1786 843"><tbody><tr><td>44</td><td>45</td><td>46</td></tr></tbody></table>	44	45	46
44	45	46			
Three tens and seven ones		Four tens and eight ones			

Answers

To know how to compare objects within 50

Guided Practice:

Complete the table by adding in the correct inequality symbol.

	$=$				
	$<$	<table border="1" data-bbox="1373 736 1791 848"><tbody><tr><td>44</td><td>45</td><td>46</td></tr></tbody></table>	44	45	46
44	45	46			
Three tens and seven ones		Four tens and eight ones			


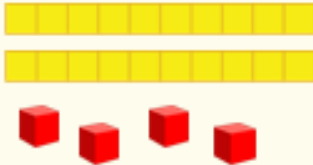

Answers



To know how to compare objects within 50

Guided Practice:

Complete the table by adding in the correct inequality symbol.

	$=$				
	$<$	<table border="1" data-bbox="1373 733 1786 845"><tbody><tr><td>44</td><td>45</td><td>46</td></tr></tbody></table>	44	45	46
44	45	46			
Three tens and seven ones	$<$	Four tens and eight ones			

Answers



To know how to compare objects within 50

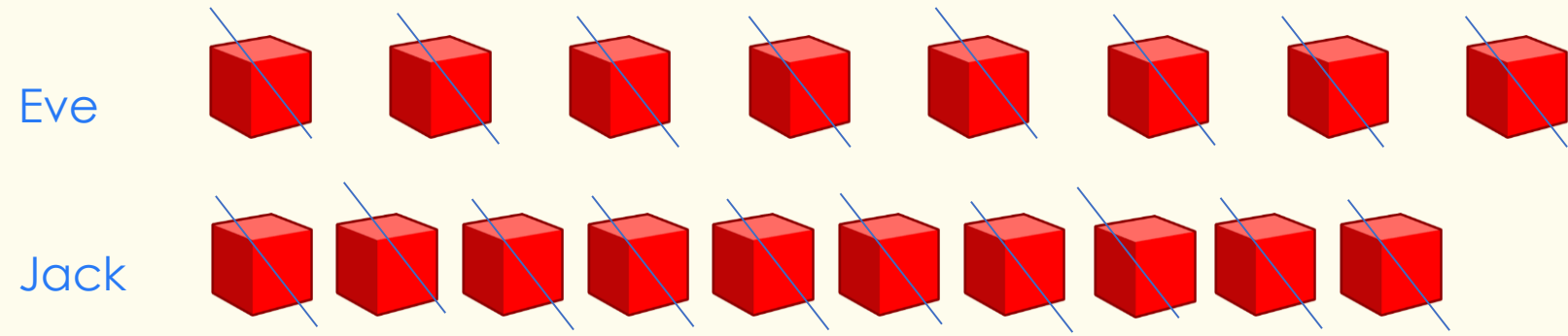
Let's Reflect:

Eve and Jack are counting blocks.

Eve says, 'I have more.'

Jack says, 'I have more.'

Who is right?



Answers



To know how to compare objects within 50

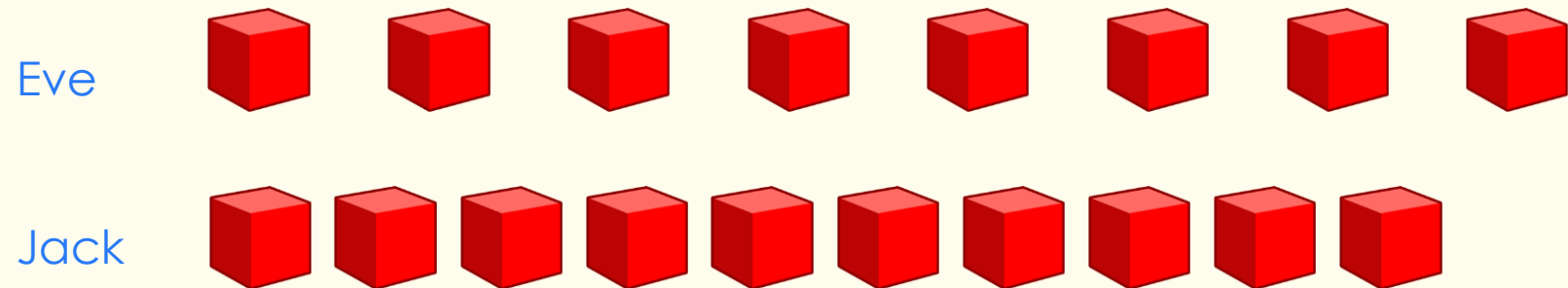
Let's Reflect:

Eve and Jack are counting blocks.

Eve says, 'I have more.'

Jack says, 'I have more.'

Who is right?



Jack has more. It is hard to see because they have lined them up with different spacing

Answers