



THIRD SPACE
LEARNING

Ready-to-go Lesson Slides

Year 1

Place Value (within 50)

Lesson 2

To find one more and one less

Spring



To find one more and one less

Key Vocabulary:

One more	One less
----------	----------

Sentence Stems:

One more than (number) is (number).

One less than (number) is (number).

To find one more and one less

Hinge Question:

Jack has 6 sweets.

Jill has one more sweet than Jack.

How many does she have?



A 6

C 10

B 5

D 7




To find one more and one less

Starter:

George is picking strawberries.

How many does he have?



How many would he have if he picked one more?


Answers

To find one more and one less

Starter:

George is picking strawberries.

How many does he have?



How many would he have if he picked one more?

George has 14 strawberries.


One more than 14 is 15.

Answers

To find one more and one less

George eats one of the strawberries.

How many does he have now?




Answers

To find one more and one less

George eats one of the strawberries.

How many does he have now?



George has 13 strawberries.

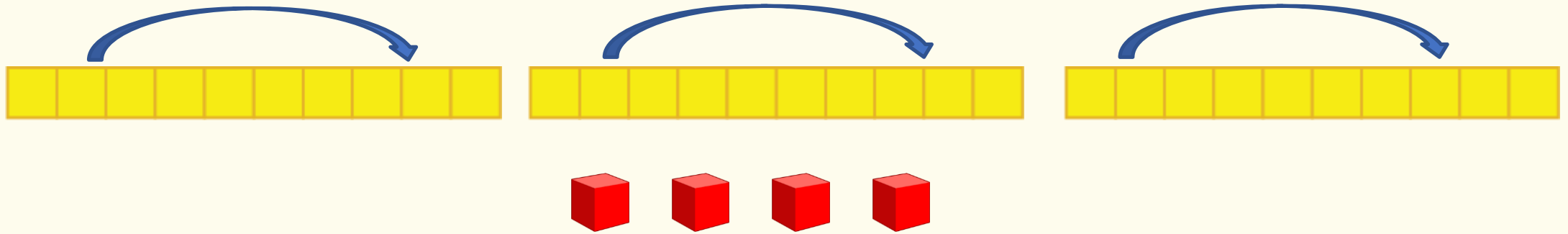
One less than 14 is 13.

Answers

To find one more and one less

Guided Practice:

Look at this representation and complete the sentences.



One more than _____ is _____ .

$$1 + 1 + 1 + 1$$

One less than _____ is _____ .

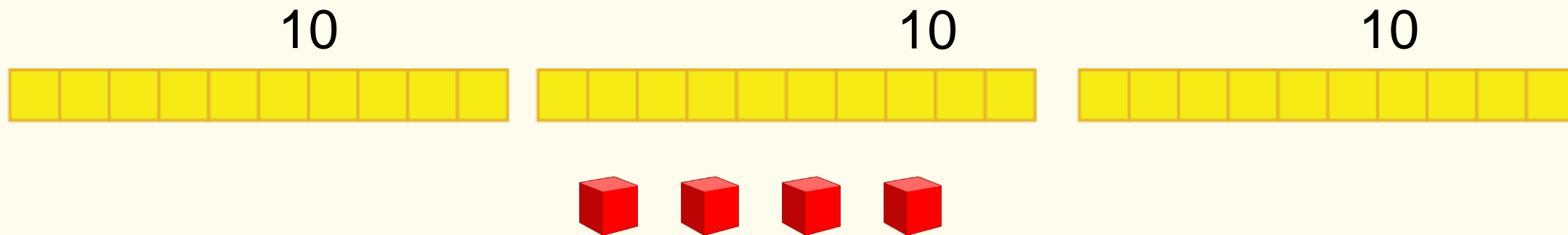
Answers



To find one more and one less

Guided Practice:

Look at this representation and complete the sentences.



One more than 34 is 35 .

$$1 + 1 + 1 + 1$$

One less than 34 is 33 .

Answers

To find one more and one less

Guided Practice:

Find one more and one less using the circled numbers.

1	2	3	4	5	6	7	8	9	10
11	12	13	14	15	16	17	18	19	20
21	22	23	24	25	26	27	28	29	30
31	32	33	34	35	36	37	38	39	40
41	42	43	44	45	46	47	48	49	50

One more than _____ is _____ .

One less than _____ is _____ .

One more than _____ is _____ .

One less than _____ is _____ .

Answers

To find one more and one less

Guided Practice:

Find one more and one less using the circled numbers.

1	2	3	4	5	6	7	8	9	10
11	12	13	14	15	16	17	18	19	20
21	22	23	24	25	26	27	28	29	30
31	32	33	34	35	36	37	38	39	40
41	42	43	44	45	46	47	48	49	50

One **more** than three is four .

One **less** than three is two .

One **more** than twenty- seven is twenty- eight .

One **less** than twenty- seven is twenty- six.

Answers

To find one more and one less

Let's Reflect:

Always, sometimes, never...



When you find one more than a number, only the ones digit will change.

Convince me using some examples.

Answers

To find one more and one less

Let's Reflect:

Always, sometimes, never...



When you find one more than a number, only the ones digit will change.

Convince me using some examples.

Sometimes.

One more than 26 is 27. Only the ones have changed but one more than 29 is 30, the tens and ones digit has changed.

Answers