



THIRD SPACE
LEARNING

Ready-to-go Lesson Slides

Year 2

Measurement - Money

Lesson 11


To use addition and subtraction skills to solve 2-step problems



To use addition and subtraction skills to solve 2-step problems

Guided Practice:

Harry has 90p. He bought a pencil sharpener for 20p. He wants to buy a pencil.



Pencil
80p

The shopkeeper will not sell him the pencil.


Explain why.

Answers

To use addition and subtraction skills to solve 2-step problems

Guided Practice:

Harry has 90p. He bought a pencil sharpener for 20p. He wants to buy a pencil.



Pencil
80p

$$90p - 20p = 70p$$

$$70p < 80p$$

The shopkeeper will not sell him the pencil.




Explain why.

Harry does not have enough money left to buy the pencil.

Answers

To use addition and subtraction skills to solve 2-step problems






You buy	You Pay	Your change	Correct or Incorrect ✓ ✗	Correct amount required
				

Apple costs 48p. You pay with 50p.

$$50\text{p} - 48\text{p} =$$

Use Base 10. Or find the difference by counting up.

To use addition and subtraction skills to solve 2-step problems




You buy	You Pay	Your change	Correct or Incorrect ✓ ✗	Correct amount required
				

Apple costs 48p. You pay with 50p.

$$50\text{p} - 48\text{p} = 2\text{p}$$

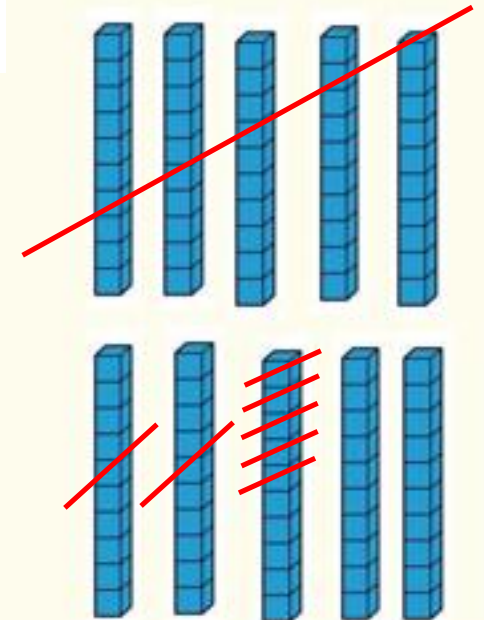
2p. So they are correct.

To use addition and subtraction skills to solve 2-step problems




You buy	You pay	Your change	Correct or Incorrect (✓/x)	Correct amount required
				

Wool costs 75p. You pay with 100p (£1).

$$100\text{p} - 75\text{p} = 25\text{p}$$



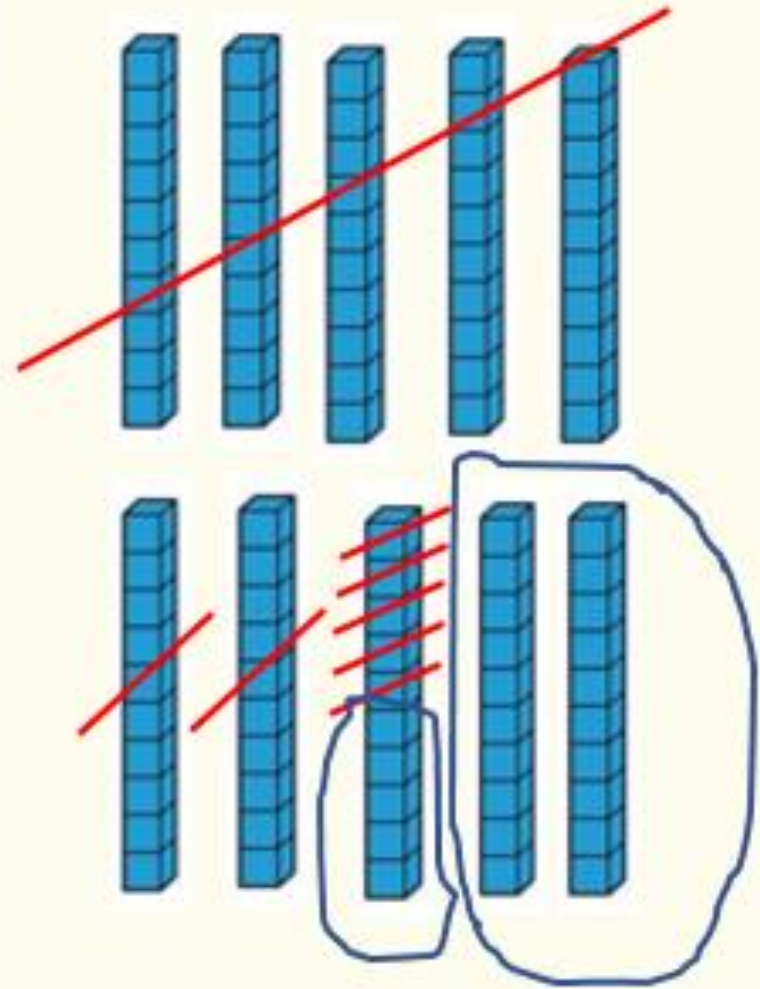
To use addition and subtraction skills to solve 2-step problems

You buy	You pay	Your change	Correct or Incorrect (✓/x)	Correct amount required
				

25p change.

Does it match?

Yes- it does.



To use addition and subtraction skills to solve 2-step problems

Independent tasks

Within £1

Check the change the shopkeeper has given you. Is it the correct amount or have they made a mistake?

You buy	You pay	Your change	Correct or Incorrect (✓/x)	Correct amount required
				
				
				
				
				

Within 20p

Check the change the shopkeeper has given you. Is it the correct amount or have they made a mistake?

You buy	You Pay	Your change	Correct or Incorrect ✓ X	Correct amount required
