



THIRD SPACE
LEARNING

Ready-to-go Lesson Slides

Year 1

Money
Lesson 2

Sum5

To recognise notes

- I know that English bank notes come in pounds (£)
- I can start to identify the value of different bank notes

Starter:

Priya and Martha have some different coins. Priya says because she has more coins her coins have the highest value. Is she correct?

Priya:



Martha:




To recognise notes

- I know that English bank notes come in pounds (£)
- I can start to identify the value of different bank notes

Starter:

Priya and Martha have some different coins. Priya says because she has more coins her coins have the highest value. Is she correct?



Priya is not correct as her coins value 30p while Martha's coin is £1. $£1 > 30p$.

To recognise notes

Talking time:

What notes can you see? Tell your partner. E.g.
'There is 1 _____ note'



To recognise notes

Talking time:

What notes can you see? Tell your partner. E.g.
'There is 1 _____ note'



There is 1 £5 note

There is 1 £10 note



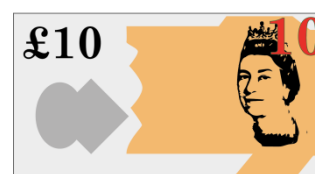

There is 1 £20 note

To recognise notes

Talking time:

What notes can you see? Tell your partner. E.g.



'There are _____ notes'



To recognise notes

Talking time:

What notes can you see? Tell your partner. E.g.
'There are _____ notes'



There are 4 £5 notes
There are 3 £10 notes
There are 2 £20 notes

To recognise notes

Talking time:

What notes can you see? Tell your partner. E.g.


'There are _____ notes'



To recognise notes

Talking time:

What notes can you see? Tell your partner. E.g.
'There are _____ notes'





There are 2 £5 notes
There are 3 £10 notes
There are 4 £20 notes

To recognise notes

Activity 1:

Write down the different notes you can see. E.g.
'There are _____ £5 notes'



Extension:

Which note would you rather get for your pocket money?
Why?

To recognise notes

Activity 1:

Write down the different notes you can see. E.g.
'There are _____ £5 notes'



There are 2 £5 notes.
There are 5 £10 notes.
There are 3 £20 notes.

Extension:

Which note would you rather get for your pocket money?
Why?


To recognise notes

Talking time:

What is the value of this note?



=



pounds

To recognise notes

Talking time:

What is the value of this note?



=

5

pounds

To recognise notes

Talking time:

What is the value of this note?



=

pounds

To recognise notes

Talking time:

What is the value of this note?



=


10

pounds


To recognise notes

Talking time:

What is the value of this note?



=



pounds

To recognise notes

Talking time:

What is the value of this note?



=

20

pounds

To recognise notes

Activity 2:

Write down the value of each note.

**Extension:**

Use <, > or = symbols to write sentences about the notes.

To recognise notes

Activity 2:

Write down the value of each note.

**Extension:**

Use <, > or = symbols to write sentences about the notes.

To recognise notes

Talking time:

How many £5 notes are the same as 1 £10 note?



To recognise notes

Talking time:

How many £5 notes are the same as 1 £10 note?



2 £5 notes are the same as 1 £10 note.

To recognise notes

Talking time:

How many £10 notes are the same as 1 £20 note?



To recognise notes

Talking time:

How many £10 notes are the same as 1 £20 note?



2 £10 notes are the same as 1 £20 note.

To recognise notes

Activity 3:

Fill in the blanks.



= one



= one



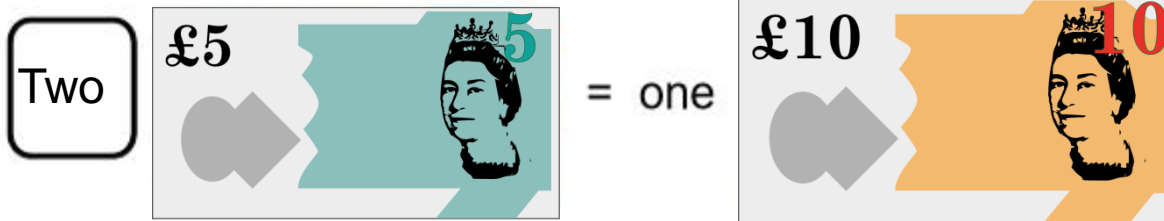
Extension:

Can you write your own examples with different amounts of each note?

To recognise notes

Activity 3:

Fill in the blanks.



Extension:
Can you write your own examples with different amounts of each note?

To recognise notes

- I know that English bank notes come in pounds (£)
- I can start to identify the value of different bank notes

Evaluation:

Two twins were opening their birthday cards. These notes fell out. How much did each twin get? Who got the most money for their birthday?



To recognise notes

- I know that English bank notes come in pounds (£)
- I can start to identify the value of different bank notes

Evaluation:

Two twins were opening their birthday cards. These notes fell out. How much did each twin get? Who got the most money for their birthday?



Moussa got 2 £10 notes.

Jan got 1 £20 note.

They both got the same amount, as $2 \text{ £10 notes} = 1 \text{ £20 note}$.