



THIRD SPACE
LEARNING

Ready-to-go Lesson Slides

Year 2

Measurement - Money


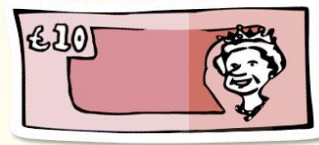
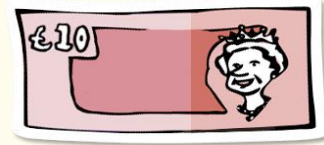
Lesson 2

To count money in £1 and £2 coins, as well as £5, £10 and £20 notes

To count money in £1 and £2 coins, as well as £5, £10 and £20 notes

Hinge Question:

What is the total?



A 30p

C £30

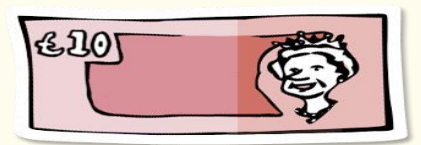

B £7

D £35

To count money in £1 and £2 coins, as well as £5, £10 and £20 notes

Starter:

Match the notes and coins to the correct value.



£2

£5

£10

2p

£1

50p

£20

Answers

To count money in £1 and £2 coins, as well as £5, £10 and £20 notes

Starter:

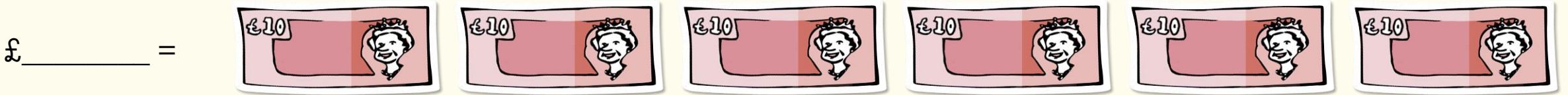
Match the notes and coins to the correct value.

£2 £5 £10 2p £1 50p £20

Answers

To count money in £1 and £2 coins, as well as £5, £10 and £20 notes

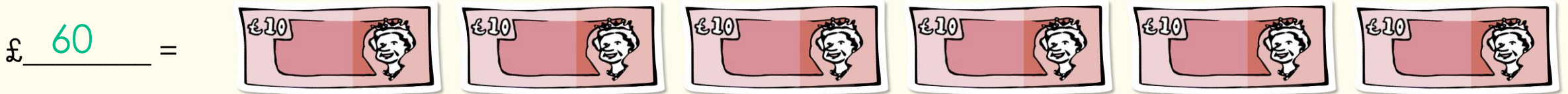
Count the money.



Answers

To count money in £1 and £2 coins, as well as £5, £10 and £20 notes

Count the money.



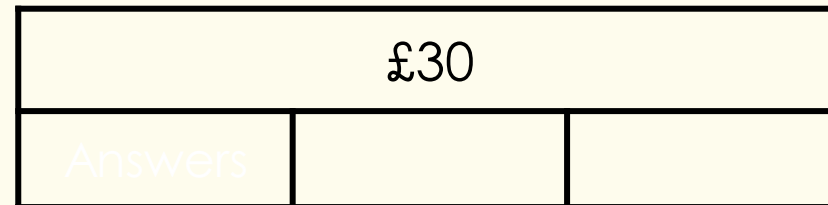
Answers



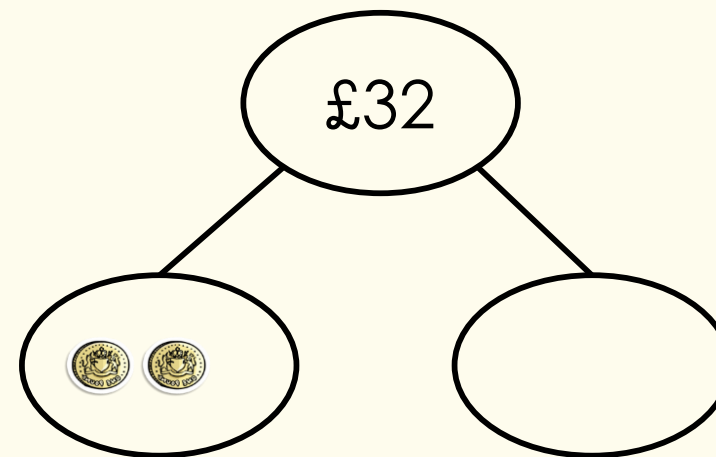
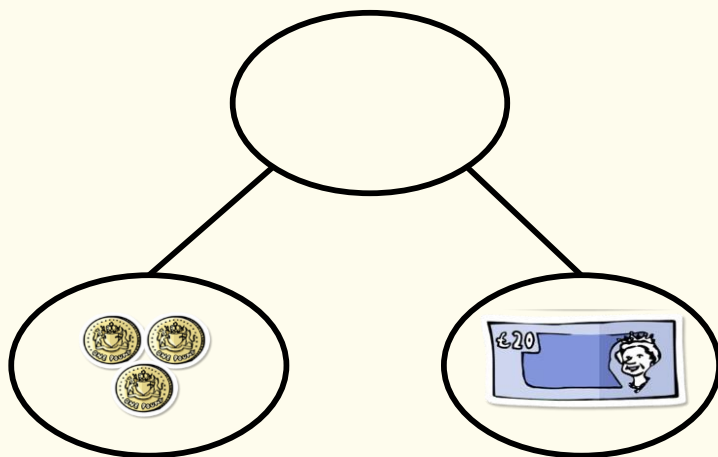
To count money in £1 and £2 coins, as well as £5, £10 and £20 notes

Guided Practice:

Complete the bar models:



Complete the part-whole models:

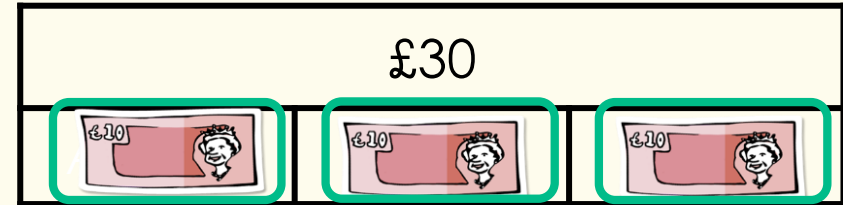



Answers

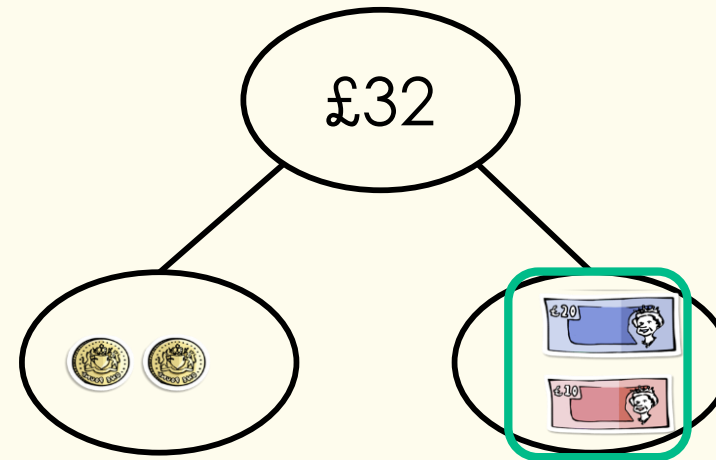
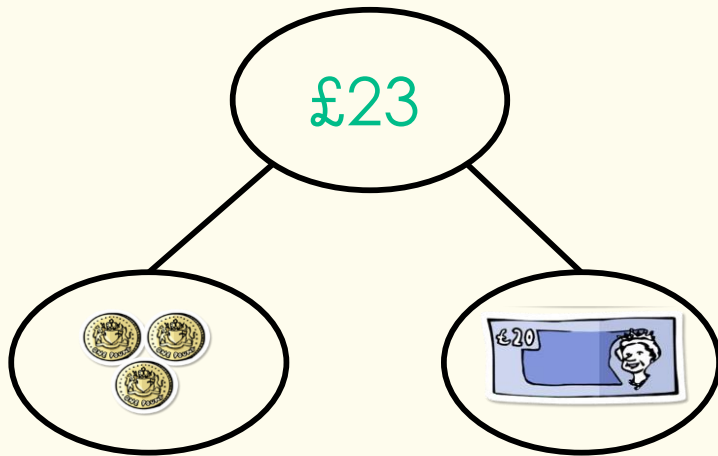
To count money in £1 and £2 coins, as well as £5, £10 and £20 notes

Guided Practice:

Complete the bar models:



Complete the part-whole models:





Various answers
that add up to
£30 - for example:
 $£20 + £10$;
 $£10 + £10 + £10$;
 $£20 + £5 + £5$

Answers

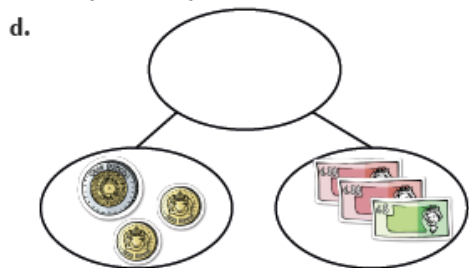
To count money in £1 and £2 coins, as well as £5, £10 and £20 notes

Independent Practice:

1. Complete the bar models.



Complete the part-whole models.

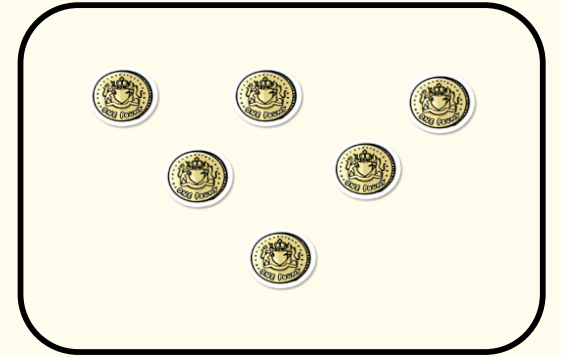
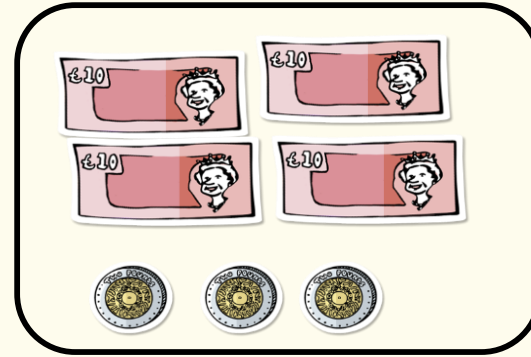




To count money in £1 and £2 coins, as well as £5, £10 and £20 notes

Guided Practice:

Match the money to the correct total.

Which total is left?



£46

£60

£6

£32

£28

Can you draw the money that matches the left out total?

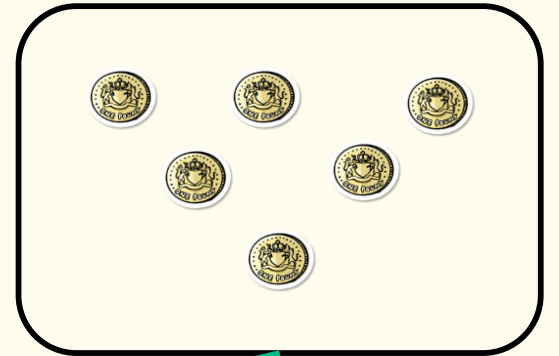
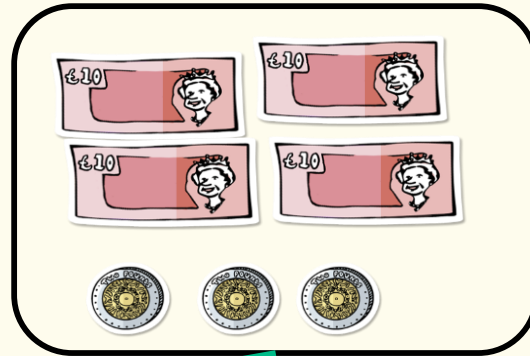


Answers

To count money in £1 and £2 coins, as well as £5, £10 and £20 notes

Guided Practice:

Match the money to the correct total.

Which total is left?



£46

£60

£6

£32

£28

Can you draw the money that matches the left out total?

Answers

To count money in £1 and £2 coins, as well as £5, £10 and £20 notes

Independent Practice:

2. How much money is shown below? Circle the answer.

a.



£56

£58

£60

b.



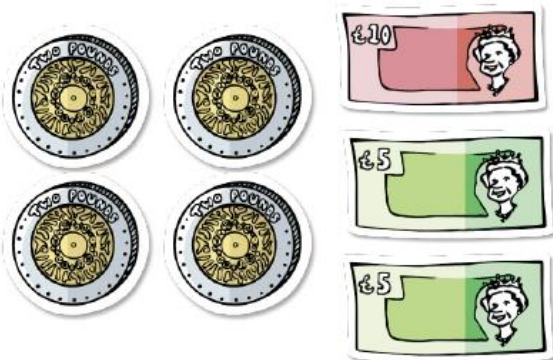
£45

£47

£49

Count the money below.

c.



£

d.



£




To count money in £1 and £2 coins, as well as £5, £10 and £20 notes

Guided Practice:

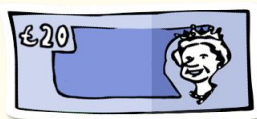
The Mathstronauts have been saving their spending money.



The Red Mathstronaut has saved:



The Yellow Mathstronaut has saved:



Who has saved the most money?

Explain your answer.

Answers



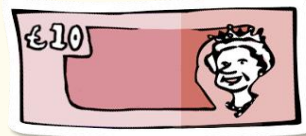
To count money in £1 and £2 coins, as well as £5, £10 and £20 notes

Guided Practice:


The Mathstronauts have been saving their spending money.



The Red Mathstronaut has saved:



The Yellow Mathstronaut has saved:



Who has saved the most money?

Explain your answer.

The Red Mathstronaut has saved the most money because he has saved £27. The Yellow Mathstronaut has only saved £23.

Answers

To count money in £1 and £2 coins, as well as £5, £10 and £20 notes

Independent Practice:

- 3.** Toby thinks he has £22.
Is he correct?
Explain your answer.





To count money in £1 and £2 coins, as well as £5, £10 and £20 notes

Let's Reflect:

Ellie is trying to make the amount £40 with different notes or coins.

Can you complete the sentences?




£40 =

£1 coins



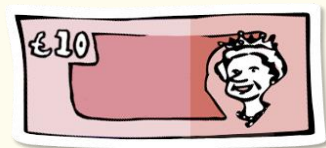
£40 =

£2 coins



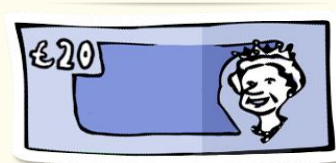
£40 =

£5 notes



£40 =

£10 notes



£40 =

£20 notes



To count money in £1 and £2 coins, as well as £5, £10 and £20 notes

Let's Reflect:

Ellie is trying to make the amount £40 with different notes or coins.

Can you complete the sentences?



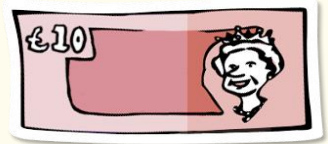
£40 = £1 coins




£40 = £2 coins



£40 = £5 notes



£40 = £10 notes



£40 = £20 notes

Answers