



THIRD SPACE
LEARNING

Fluent in Five

Questions and Answers

Year 2

Week 34



Year 2 – Week 34

This week in a nutshell:

As with last week, Fluent in Five will focus on the full range of questions from the Key Stage 1 curriculum, and begin to prepare them for their Key Stage 2 learning. Therefore, questions covering addition, subtraction, multiplication, division and fractions will be present throughout the week.



THIRD SPACE
LEARNING

Year 2

Week 34 – Day 1

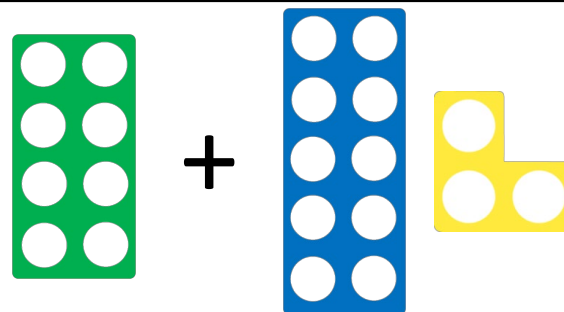
$$A. 83 + ? = 90$$

You choose...

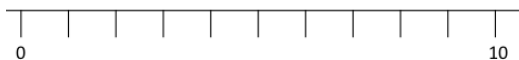
...what to use...

...to help you

$$B. 8 + 13 =$$



Use...



A number line

$$C. 97 - 28 =$$

...to help you



Year 2

Week 34 – Day 1 (Answers)

THIRD SPACE
LEARNING

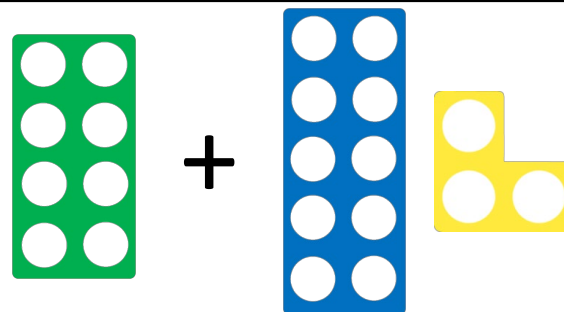
$$A. 83 + 7 = 90$$

You choose...

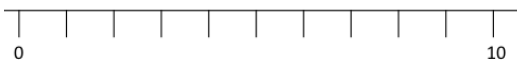
...what to use...

...to help you

$$B. 8 + 13 = 21$$



Use...



$$C. 97 - 28 = 69$$

A number line

...to help you



THIRD SPACE
LEARNING

Fluent in Five

Questions and Answers

Week 34

Day 2



Year 2

Week 34 – Day 2

THIRD SPACE
LEARNING


$$A. 88 - 18 =$$

You choose...

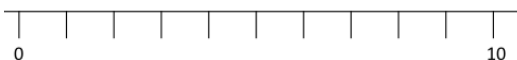
...what to use...

...to help you

$$B. 55 \div ? = 11$$



Use...



A number line

$$C. 86 + 14 =$$

...to help you



Year 2

Week 34 – Day 2 (Answers)

THIRD SPACE
LEARNING


$$A. 88 - 18 = 70$$

You choose...

...what to use...

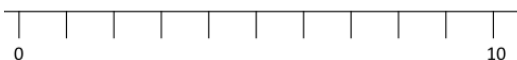
...to help you

$$B. 55 \div 5 = 11$$



$$C. 86 + 14 = 100$$

Use...



A number line

...to help you



THIRD SPACE
LEARNING

Fluent in Five

Questions and Answers

Week 34

Day 3




Year 2

Week 34 – Day 3

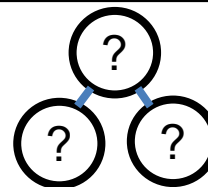
THIRD SPACE
LEARNING

$$A. 45 \div 9 =$$



$$B. ? - 22 = 34$$

Use...



Part-Whole Model
...to help you

$$C. 34 + 39 =$$

You choose...

...what to use...

...to help you




Year 2

Week 34 – Day 3 (Answers)

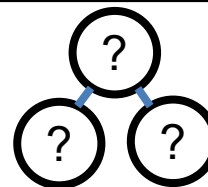
THIRD SPACE
LEARNING

$$A. 45 \div 9 = 5$$



$$B. 56 - 22 = 34$$

Use...



Part-Whole Model
...to help you

$$C. 34 + 39 = 73$$

You choose...

...what to use...

...to help you



THIRD SPACE
LEARNING

Fluent in Five

Questions and Answers

Week 34

Day 4



Year 2

Week 34 – Day 4

THIRD SPACE
LEARNING

$$A. 8 \times 10 =$$

Use...



Number shapes

...to help you

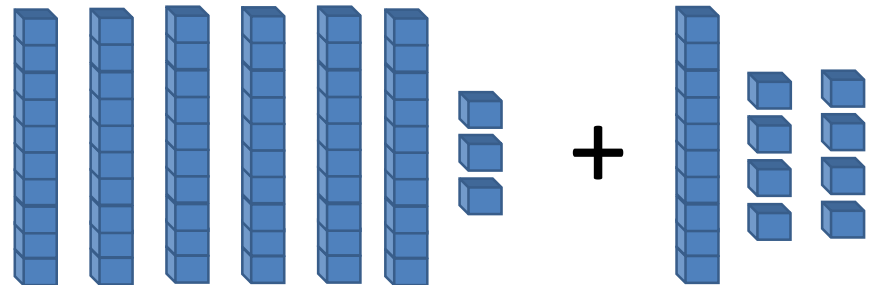
$$B. 9 \times ? = 18$$

You choose...

...what to use...

...to help you

$$C. 63 + 18 =$$





THIRD SPACE
LEARNING

Year 2

Week 34 – Day 4 (Answers)

$$A. 8 \times 10 = 80$$

Use...



Number shapes

...to help you

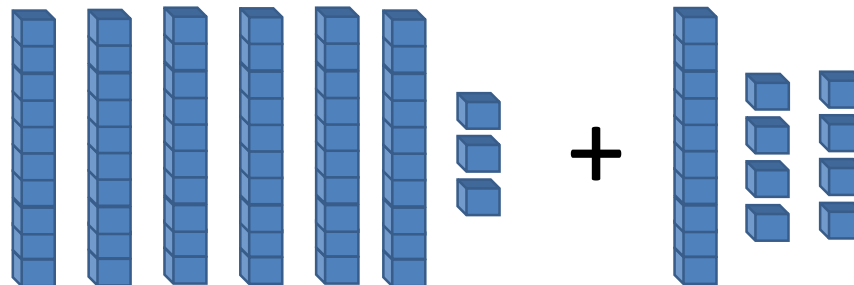
$$B. 9 \times 2 = 18$$

You choose...

...what to use...

...to help you

$$C. 63 + 18 = 81$$





THIRD SPACE
LEARNING

Fluent in Five

Questions and Answers

Week 34

Day 5



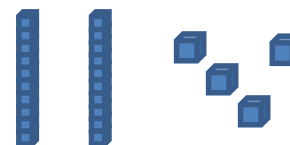
THIRD SPACE
LEARNING

Year 2

Week 34 – Day 5

$$A. 100 - ? = 10$$


Use...



Base 10

...to help you

$$B. 9 \times 2 =$$



You choose...

$$C. 2 + 3 + 12 =$$

...what to use...

...to help you



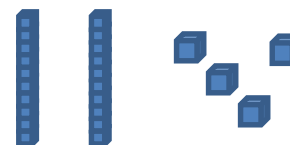
Year 2

Week 34 – Day 5 (Answers)

THIRD SPACE
LEARNING

$$A. 100 - 90 = 10$$


Use...



Base 10

...to help you

$$B. 9 \times 2 = 18$$



You choose...

$$C. 2 + 3 + 12 = 17$$

...what to use...

...to help you