


Number and Place Value

End-Of-Strand Assessment


Name: _____ Date: _____

1. How many apples?



1 mark

2. How many carrots?



1 mark

3. Draw a model or picture to represent the number 23.

1 mark

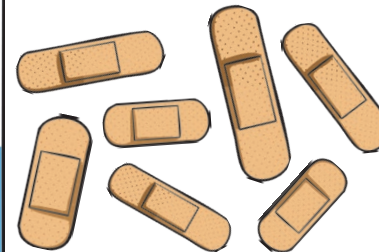
4. Pedro is counting in steps of 1.
Fill in the missing numbers.

65, 66, 67, 68, 69, _____, _____, _____



1 mark

5. How many plasters are there altogether?
Circle the correct answer.



107

108

109

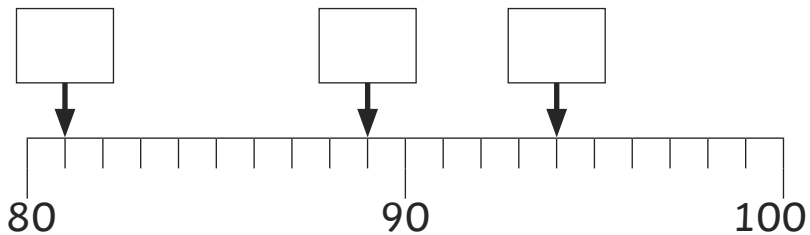
1 mark

6. Fill in the missing numbers.

83	82	81			
----	----	----	--	--	--

1 mark

7. Fill in the boxes to show the numbers on the number line.









1 mark

8. Fill in the gaps in the table.

Numerals	Words
8	
	zero
12	
	fifteen
20	

3 marks

9. Which numbers are missing on the 100 square? Write them in the boxes below.

51	52		54	55	56	57	58	59	
61	62	63	64	65	66	67		69	70
71	72	73	74		76	77	78	79	80
81	82	83	84	85	86		88	89	90
91	92	93	94	95	96	97	98		100

<input type="text"/>	<input type="text"/>	<input type="text"/>	<input type="text"/>	<input type="text"/>	<input type="text"/>
----------------------	----------------------	----------------------	----------------------	----------------------	----------------------

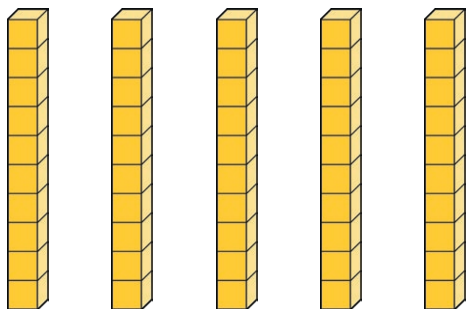
3 marks

10. How many socks? Count in steps of 2.



1 mark

11. Count the base ten sticks to find the total.



1 mark

12. How many toes? Count in steps of 5.




1 mark

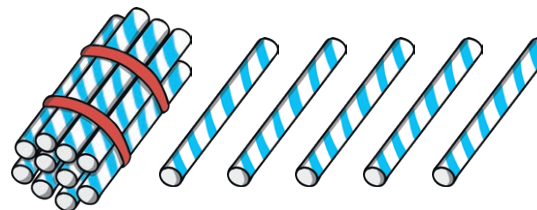
13. Fill in the gaps in the table.

24	← 1 less	25	1 more →	
	← 1 less	59	1 more →	
68	← 1 less		1 more →	70

2 marks

14. Write the number shown by each model.





2 marks

15. Choose the correct word to complete each sentence.

more fewer most equal less




Dawn has _____ flowers than Ali.

Will has _____ flowers than Ali.

1 mark

16. Make the towers equal.




1 mark

17. Circle the person who is second in the line.



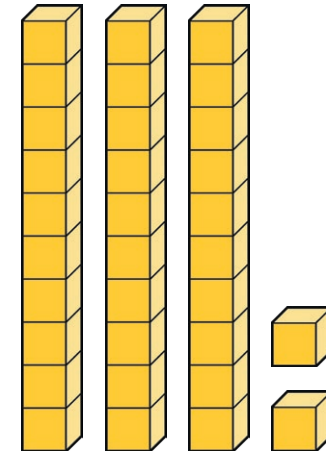
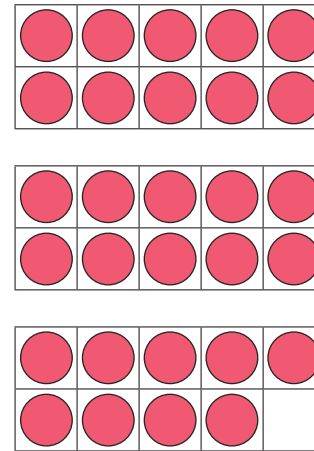
1 mark

18. How many skittles were knocked down?



1 mark

19. Compare the numbers and circle the greater.



1 mark

20. Complete the counting patterns.


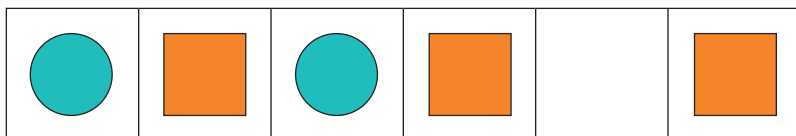

40	45	50		
----	----	----	--	--

6	8	10		
---	---	----	--	--

60	70	80		
----	----	----	--	--

3 marks

21. Circle which shape is missing in each pattern.



2 marks

Total
30 marks